

Spring Progress Check

Year 4

Mathematics

Paper 1: arithmetic

First name						
Middle name						
Last name						
Date of birth	Day		Month		Year	
Teacher						

These assessments have been designed by White Rose Maths.
For more information, please visit www.whiterosemaths.com



[BLANK PAGE]

Please do not write on this page.

Instructions

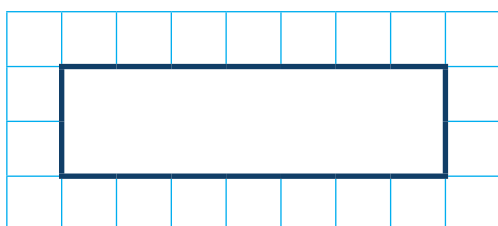
You **may not** use a calculator to answer any questions in this test.

Questions and answers

You have **20 minutes** to complete this test.

Work as quickly and as carefully as you can.

Put your answer in the box for each question.



If you cannot do one of the questions, **go on to the next one**.

You can come back to it later, if you have time.

If you finish before the end, **go back and check your work**.

Marks

The number under each box at the side of the page tells you the maximum number of marks for each question.

1

$$250 + 100 =$$

1 mark

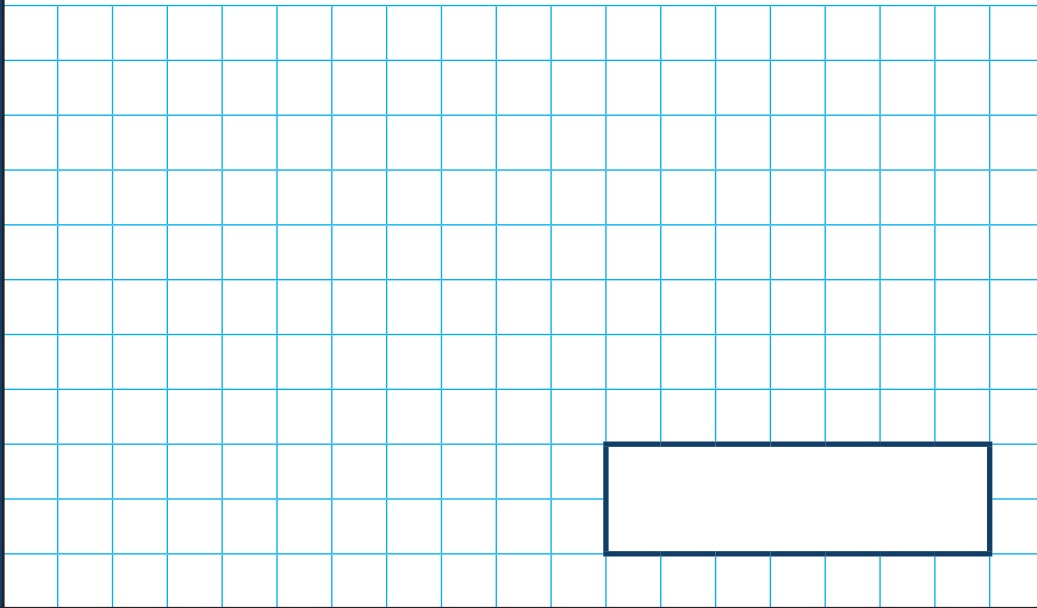
2

$$5 \times 8 =$$

1 mark

3

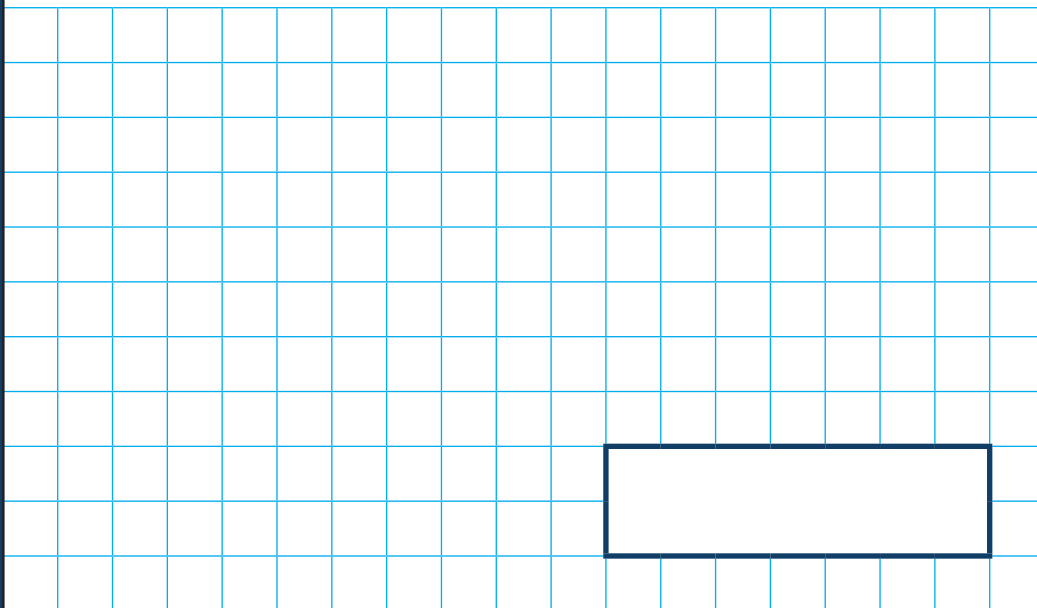
$$3 \times 4 \times 2 =$$



1 mark

4

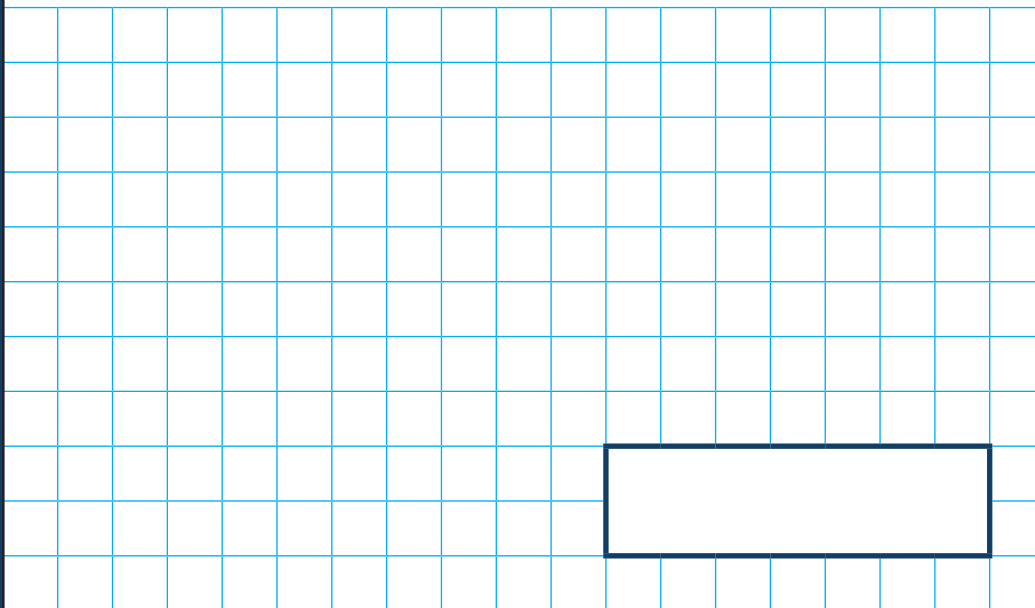
$$42 \div 6 =$$



1 mark

5

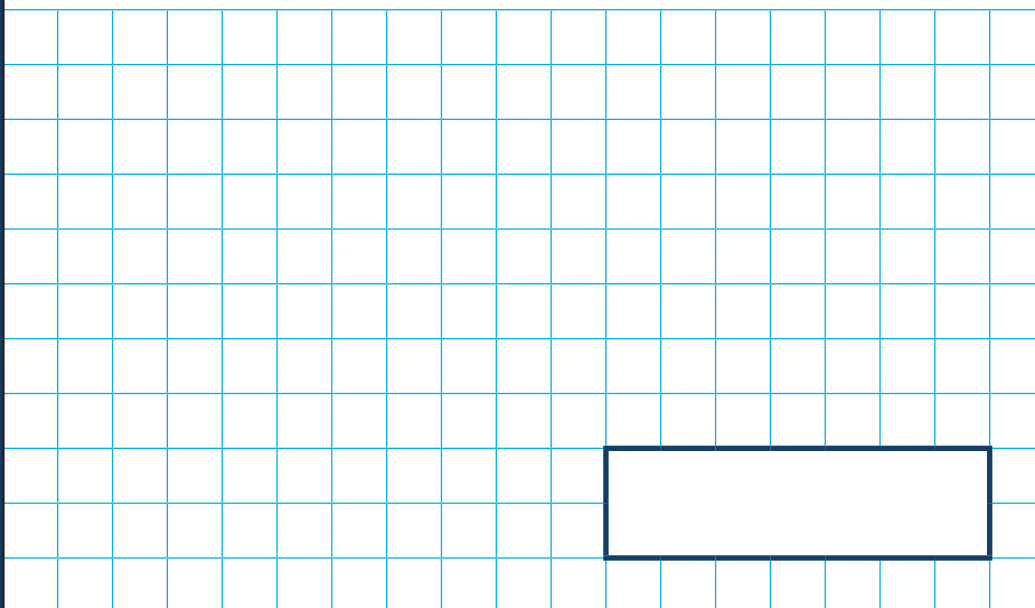
$$9 \times 4 \times 2 =$$



1 mark

6

$$\frac{2}{7} + \frac{3}{7} =$$



1 mark

7

$$= 3,450 + 1,650$$

1 mark

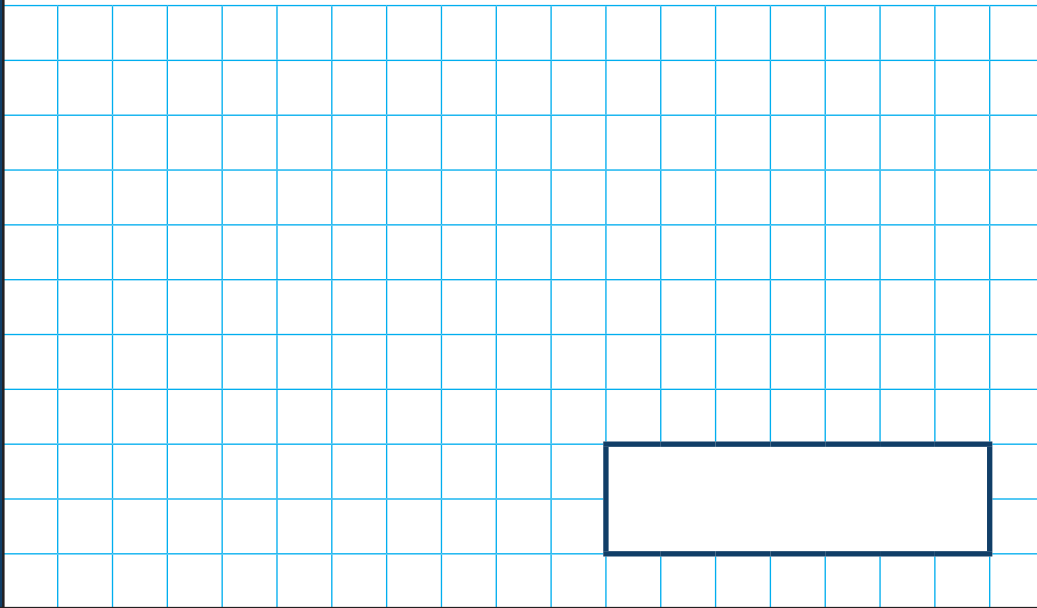
8

$$\frac{1}{4} \text{ of } 28 =$$

1 mark

9

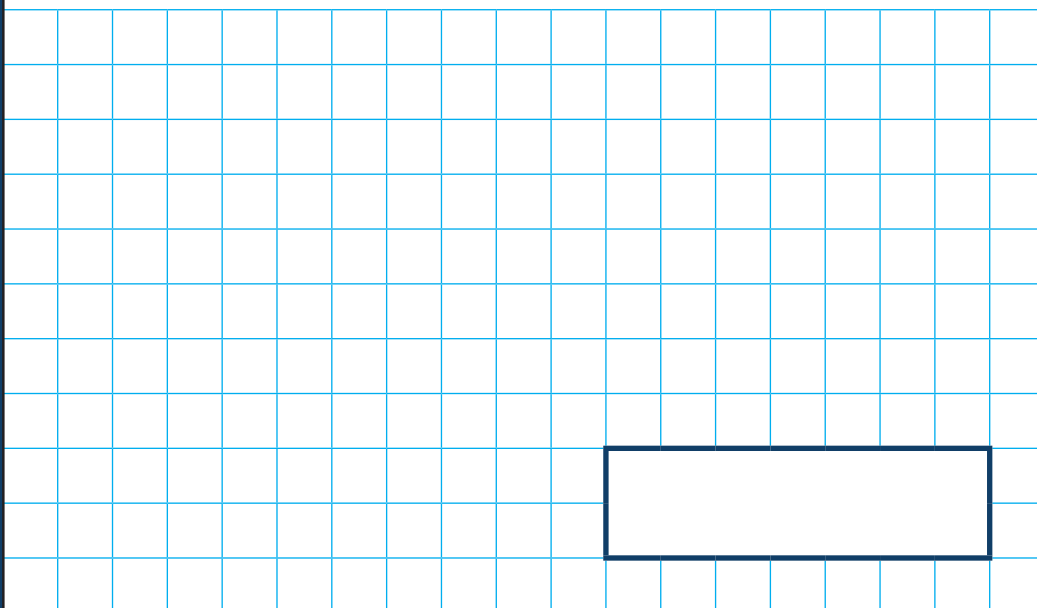
$$1 - \frac{5}{9} =$$



1 mark

10

$$39 \times 7 =$$



1 mark

11

$$78 \div 3 =$$

1 mark

12

$$4,509 - 1,995 =$$

1 mark

13

$$\frac{5}{12} + \frac{11}{12} = \boxed{} + \frac{1}{12}$$

1 mark

14

$$132 \div 11 =$$

1 mark

15

$$134 \times 6 =$$

1 mark

16

$$\frac{2}{3} \text{ of } \text{£}36$$

1 mark

17

$$\frac{63}{100} - \boxed{} = 0.47$$

1 mark


18

$$345 \times 8 = 3,450 - \boxed{}$$

2 marks

19

$\frac{3}{5}$ of = 90



1 mark

[BLANK PAGE]

Please do not write on this page.

[BLANK PAGE]

Please do not write on this page.

[BLANK PAGE]

Please do not write on this page.